

6 Directed Graphs

6.1 Definitions

So far, we have been working with graphs with undirected edges. A *directed edge* is an edge where the endpoints are distinguished—one is the *head* and one is the *tail*. In particular, a directed edge is specified as an ordered pair of vertices u, v and is denoted by (u, v) or $u \rightarrow v$. In this case, u is the *tail* of the edge and v is the *head*. For example, see Figure 6.1.

A graph with directed edges is called a *directed graph* or *digraph*.

Definition 6.1.1. A directed graph $G = (V, E)$ consists of a nonempty set of nodes V and a set of directed edges E . Each edge e of E is specified by an ordered pair of vertices $u, v \in V$. A directed graph is *simple* if it has no *loops* (that is, edges of the form $u \rightarrow u$) and no multiple edges.

Since we will focus on the case of simple directed graphs in this chapter, we will generally omit the word *simple* when referring to them. Note that such a graph can contain an edge $u \rightarrow v$ as well as the edge $v \rightarrow u$ since these are different edges (for example, they have a different tail).

Directed graphs arise in applications where the relationship represented by an edge is 1-way or asymmetric. Examples include: a 1-way street, one person likes another but the feeling is not necessarily reciprocated, a communication channel such as a cable modem that has more capacity for downloading than uploading, one entity is larger than another, and one job needs to be completed before another job can begin. We’ll see several such examples in this chapter and also in Chapter 7.

Most all of the definitions for undirected graphs from Chapter 5 carry over in a natural way for directed graphs. For example, two directed graphs $G_1 = (V_1, E_1)$ and $G_2 = (V_2, E_2)$ are *isomorphic* if there exists a bijection $f : V_1 \rightarrow V_2$ such that for every pair of vertices $u, v \in V_1$,

$$u \rightarrow v \in E_1 \quad \text{IFF} \quad f(u) \rightarrow f(v) \in E_2.$$

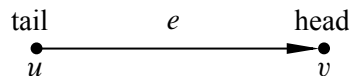


Figure 6.1 A directed edge $e = (u, v)$. u is the tail of e and v is the head of e .

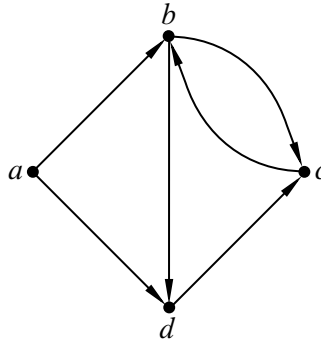


Figure 6.2 A 4-node directed graph with 6 edges.

Directed graphs have adjacency matrices just like undirected graphs. In the case of a directed graph $G = (V, E)$, the adjacency matrix $A_G = \{a_{ij}\}$ is defined so that

$$a_{ij} = \begin{cases} 1 & \text{if } i \rightarrow j \in E \\ 0 & \text{otherwise.} \end{cases}$$

The only difference is that the adjacency matrix for a directed graph is not necessarily symmetric (that is, it may be that $A_G^T \neq A_G$).

6.1.1 Degrees

With directed graphs, the notion of degree splits into *indegree* and *outdegree*. For example, $\text{indegree}(c) = 2$ and $\text{outdegree}(c) = 1$ for the graph in Figure 6.2. If a node has outdegree 0, it is called a *sink*; if it has indegree 0, it is called a *source*. The graph in Figure 6.2 has one source (node a) and no sinks.

6.1.2 Directed Walks, Paths, and Cycles

The definitions for (directed) walks, paths, and cycles in a directed graph are similar to those for undirected graphs except that the direction of the edges need to be consistent with the order in which the walk is traversed.

Definition 6.1.2. A *directed walk* (or more simply, a *walk*) in a directed graph G is a sequence of vertices v_0, v_1, \dots, v_k and edges

$$v_0 \rightarrow v_1, v_1 \rightarrow v_2, \dots, v_{k-1} \rightarrow v_k$$

such that $v_{i-1} \rightarrow v_i$ is an edge of G for all i where $0 \leq i < k$. A *directed path* (or *path*) in a directed graph is a walk where the nodes in the walk are all different. A *directed closed walk* (or *closed walk*) in a directed graph is a walk

6.1. Definitions

where $v_0 = v_k$. A *directed cycle* (or *cycle*) in a directed graph is a closed walk where all the vertices v_i are different for $0 \leq i < k$.

As with undirected graphs, we will typically refer to a walk in a directed graph by a sequence of vertices. For example, for the graph in Figure 6.2,

- a, b, c, b, d is a walk,
- a, b, d is a path,
- d, c, b, c, b, d is a closed walk, and
- b, d, c, b is a cycle.

Note that b, c, b is also a cycle for the graph in Figure 6.2. This is a cycle of length 2. Such cycles are not possible with undirected graphs.

Also note that

$$c, b, a, d$$

is *not* a walk in the graph shown in Figure 6.2, since $b \rightarrow a$ is not an edge in this graph. (You are *not* allowed to traverse edges in the wrong direction as part of a walk.)

A path or cycle in a directed graph is said to be *Hamiltonian* if it visits every node in the graph. For example, a, b, d, c is the only Hamiltonian path for the graph in Figure 6.2. The graph in Figure 6.2 does not have a Hamiltonian cycle.

A walk in a directed graph is said to be *Eulerian* if it contains every edge. The graph shown in Figure 6.2 does not have an Eulerian walk. Can you see why not? (Hint: Look at node a .)

6.1.3 Strong Connectivity

The notion of being connected is a little more complicated for a directed graph than it is for an undirected graph. For example, should we consider the graph in Figure 6.2 to be connected? There is a path from node a to every other node so on that basis, we might answer “Yes.” But there is no path from nodes b, c , or d to node a , and so on that basis, we might answer “No.” For this reason, graph theorists have come up with the notion of *strong* connectivity for directed graphs.

Definition 6.1.3. A directed graph $G = (V, E)$ is said to be *strongly connected* if for every pair of nodes $u, v \in V$, there is a directed path from u to v (and vice-versa) in G .

For example, the graph in Figure 6.2 is not strongly connected since there is no directed path from node b to node a . But if node a is removed, the resulting graph would be strongly connected.

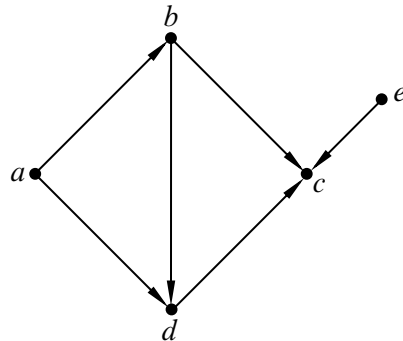


Figure 6.3 A 4-node directed acyclic graph (DAG).

A directed graph is said to be *weakly connected* (or, more simply, *connected*) if the corresponding undirected graph (where directed edges $u \rightarrow v$ and/or $v \rightarrow u$ are replaced with a single undirected edge $\{u, v\}$) is connected. For example, the graph in Figure 6.2 is weakly connected.

6.1.4 DAGs

If an undirected graph does not have any cycles, then it is a tree or a forest. But what does a directed graph look like if it has no cycles? For example, consider the graph in Figure 6.3. This graph is weakly connected and has no directed cycles but it certainly does not look like a tree.

Definition 6.1.4. A directed graph is called a *directed acyclic graph* (or, *DAG*) if it does not contain any directed cycles.

A first glance, DAGs don’t appear to be particularly interesting. But first impressions are not always accurate. In fact, DAGs arise in many scheduling and optimization problems and they have several interesting properties. We will study them extensively in Chapter 7.

6.2 Tournament Graphs

Suppose that n players compete in a round-robin tournament and that for every pair of players u and v , either u beats v or v beats u . Interpreting the results of a round-robin tournament can be problematic—there might be all sorts of cycles where x beats y and y beats z , yet z beats x . Who is the best player? Graph theory does not solve this problem but it can provide some interesting perspectives.

6.2. Tournament Graphs

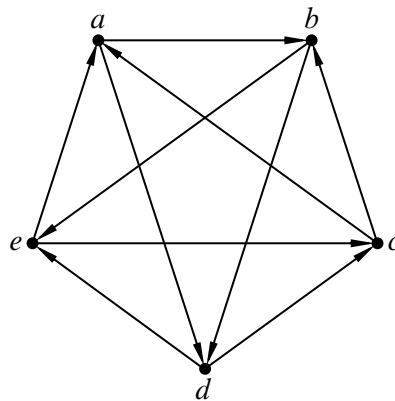


Figure 6.4 A 5-node tournament graph.

The results of a round-robin tournament can be represented with a *tournament graph*. This is a directed graph in which the vertices represent players and the edges indicate the outcomes of games. In particular, an edge from u to v indicates that player u defeated player v . In a round-robin tournament, every pair of players has a match. Thus, in a tournament graph there is either an edge from u to v or an edge from v to u (but not both) for *every* pair of distinct vertices u and v . An example of a tournament graph is shown in Figure 6.4.

6.2.1 Finding a Hamiltonian Path in a Tournament Graph

We’re going to prove that in every round-robin tournament, there exists a ranking of the players such that each player lost to the player one position higher. For example, in the tournament corresponding to Figure 6.4, the ranking

$$a > b > d > e > c$$

satisfies this criterion, because b lost to a , d lost to b , e lost to d , and c lost to e . In graph terms, proving the existence of such a ranking amounts to proving that every tournament graph has a Hamiltonian path.

Theorem 6.2.1. *Every tournament graph contains a directed Hamiltonian path.*

Proof. We use strong induction. Let $P(n)$ be the proposition that every tournament graph with n vertices contains a directed Hamiltonian path.

Base case: $P(1)$ is trivially true; every graph with a single vertex has a Hamiltonian path consisting of only that vertex.

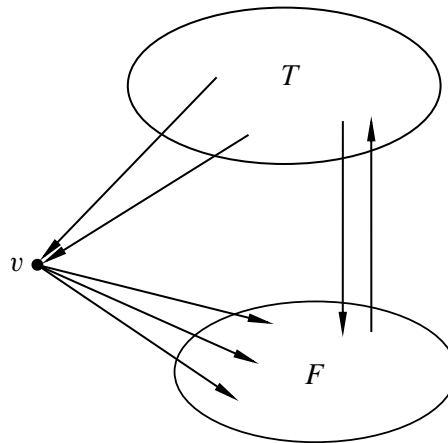


Figure 6.5 The sets T and F in a tournament graph.

Inductive step: For $n \geq 1$, we assume that $P(1), \dots, P(n)$ are all true and prove $P(n + 1)$. Consider a tournament graph $G = (V, E)$ with $n + 1$ players. Select one vertex v arbitrarily. Every other vertex in the tournament either has an edge *to* vertex v or an edge *from* vertex v . Thus, we can partition the remaining vertices into two corresponding sets, T and F , each containing at most n vertices, where $T = \{u \mid u \rightarrow v \in E\}$ and $F = \{u \mid v \rightarrow u \in E\}$. For example, see Figure 6.5.

The vertices in T together with the edges that join them form a smaller tournament. Thus, by strong induction, there is a Hamiltonian path within T . Similarly, there is a Hamiltonian path within the tournament on the vertices in F . Joining the path in T to the vertex v followed by the path in F gives a Hamiltonian path through the whole tournament. As special cases, if T or F is empty, then so is the corresponding portion of the path. ■

The ranking defined by a Hamiltonian path is not entirely satisfactory. For example, in the tournament associated with Figure 6.4, notice that the lowest-ranked player, c , actually defeated the highest-ranked player, a .

In practice, players are typically ranked according to how many victories they achieve. This makes sense for several reasons. One not-so-obvious reason is that if the player with the most victories does not beat some other player v , he is guaranteed to have at least beaten a third player who beat v . We’ll prove this fact shortly. But first, let’s talk about chickens.

6.2. Tournament Graphs

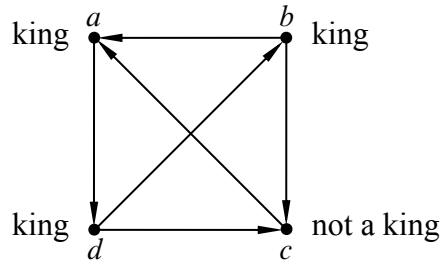


Figure 6.6 A 4-chicken tournament in which chickens a , b , and d are kings.

6.2.2 The King Chicken Theorem

Suppose that there are n chickens in a farmyard. Chickens are rather aggressive birds that tend to establish dominance in relationships by pecking. (Hence the term “pecking order.”) In particular, for each pair of distinct chickens, either the first pecks the second or the second pecks the first, but not both. We say that chicken u *virtually pecks* chicken v if either:

- Chicken u directly pecks chicken v , or
- Chicken u pecks some other chicken w who in turn pecks chicken v .

A chicken that virtually pecks every other chicken is called a *king chicken*.

We can model this situation with a tournament digraph. The vertices are chickens, and an edge $u \rightarrow v$ indicates that chicken u pecks chicken v . In the tournament shown in Figure 6.6, three of the four chickens are kings. Chicken c is not a king in this example since it does not peck chicken b and it does not peck any chicken that pecks chicken b . Chicken a is a king since it pecks chicken d , who in turn pecks chickens b and c .

Theorem 6.2.2 (King Chicken Theorem). *The chicken with the largest outdegree in an n -chicken tournament is a king.*

Proof. By contradiction. Let u be a node in a tournament graph $G = (V, E)$ with maximum outdegree and suppose that u is not a king. Let $Y = \{v \mid u \rightarrow v \in E\}$ be the set of chickens that chicken u pecks. Then $\text{outdegree}(u) = |Y|$.

Since u is not a king, there is a chicken $x \notin Y$ (that is, x is not pecked by chicken u) and that is not pecked by any chicken in Y . Since for any pair of chickens, one pecks the other, this means that x pecks u as well as every chicken in Y . This means that

$$\text{outdegree}(x) = |Y| + 1 > \text{outdegree}(u).$$

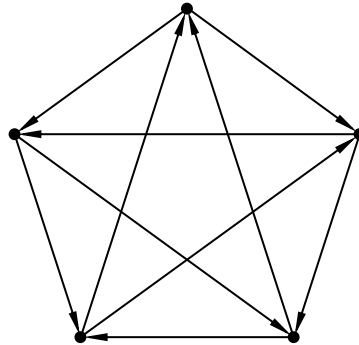


Figure 6.7 A 5-chicken tournament in which every chicken is a king.

But u was assumed to be the node with the largest degree in the tournament, so we have a contradiction. Hence, u must be a king. ■

Theorem 6.2.2 means that if the player with the most victories is defeated by another player x , then at least he/she defeats some third player that defeats x . In this sense, the player with the most victories has some sort of bragging rights over every other player. Unfortunately, as Figure 6.6 illustrates, there can be many other players with such bragging rights, even some with fewer victories. Indeed, for some tournaments, it is possible that every player is a “king.” For example, consider the tournament illustrated in Figure 6.7.

6.3 Communication Networks

While reasoning about chickens pecking each other may be amusing (to mathematicians, at least), the use of directed graphs to model communication networks is very serious business. In the context of communication problems, vertices represent computers, processors, or switches, and edges represent wires, fiber, or other transmission lines through which data flows. For some communication networks, like the Internet, the corresponding graph is enormous and largely chaotic. Highly structured networks, such as an array or butterfly, by contrast, find application in telephone switching systems and the communication hardware inside parallel computers.

6.3. Communication Networks

6.3.1 Packet Routing

Whatever architecture is chosen, the goal of a communication network is to get data from *inputs* to *outputs*. In this text, we will focus on a model in which the data to be communicated is in the form of a *packet*. In practice, a packet would consist of a fixed amount of data, and a message (such as a web page or a movie) would consist of many packets.

For simplicity, we will restrict our attention to the scenario where there is just one packet at every input and where there is just one packet destined for each output. We will denote the number of inputs and output by N and we will often assume that N is a power of two.

We will specify the desired destinations of the packets by a permutation¹ of $0, 1, \dots, N - 1$. So a permutation, π , defines a *routing problem*: get a packet that starts at input i to output $\pi(i)$ for $0 \leq i < N$. A *routing* P that *solves* a routing problem π is a set of paths from each input to its specified output. That is, P is a set of paths, P_i , for $i = 0, \dots, N - 1$, where P_i goes from input i to output $\pi(i)$.

Of course, the goal is to get all the packets to their destinations as quickly as possible using as little hardware as possible. The time needed to get the packages to their destinations depends on several factors, such as how many switches they need to go through and how many packets will need to cross the same wire. We will assume that only one packet can cross a wire at a time. The complexity of the hardware depends on factors such as the number of switches needed and the size of the switches.

Let’s see how all this works with an example—routing packets on a complete binary tree.

6.3.2 The Complete Binary Tree

One of the simplest structured communications networks is a *complete binary tree*. A complete binary tree with 4 inputs and 4 outputs is shown in Figure 6.8.

In this diagram and many that follow, the squares represent *terminals* (that is, the inputs and outputs), and the circles represent *switches*, which direct packets through the network. A switch receives packets on incoming edges and relays them forward along the outgoing edges. Thus, you can imagine a data packet hopping through the network from an input terminal, through a sequence of switches joined by directed edges, to an output terminal.

Recall that there is a unique simple path between every pair of vertices in a tree. So the natural way to route a packet of data from an input terminal to an output terminal in the complete binary tree is along the corresponding directed path. For

¹A permutation of a sequence is a reordering of the sequence.

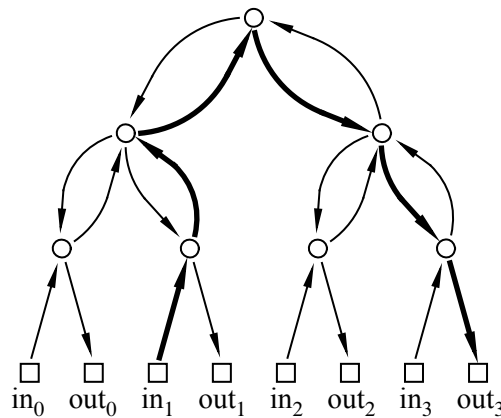


Figure 6.8 A 4-input, 4-output complete binary tree. The squares represent terminals (input and output registers) and the circles represent switches. Directed edges represent communication channels in the network through which data packets can move. The unique path from input 1 to output 3 is shown in bold.

example, the route of a packet traveling from input 1 to output 3 is shown in bold in Figure 6.8.

6.3.3 Network Diameter

The delay between the time that a packet arrives at an input and the time that it reaches its designated output is referred to as *latency* and it is a critical issue in communication networks. If congestion is not a factor, then this delay is generally proportional to the length of the path a packet follows. Assuming it takes one time unit to travel across a wire, and that there are no additional delays at switches, the delay of a packet will be the number of wires it crosses going from input to output.²

Generally a packet is routed from input to output using the shortest path possible. The length of this shortest path is the *distance* between the input and output. With a shortest path routing, the worst possible delay is the distance between the input and output that are farthest apart. This is called the *diameter* of the network. In other words, the diameter of a network³ is the maximum length of any shortest

²Latency can also be measured as the number of switches that a packet must pass through when traveling between the most distant input and output, since switches usually have the biggest impact on network speed. For example, in the complete binary tree example, the packet traveling from input 1 to output 3 crosses 5 switches, which is 1 less than the number of edges traversed.

³The usual definition of *diameter* for a general graph (simple or directed) is the largest distance between *any* two vertices, but in the context of a communication network, we’re only interested in the distance between inputs and outputs, not between arbitrary pairs of vertices.

6.3. Communication Networks

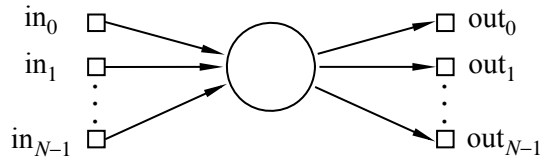


Figure 6.9 A monster $N \times N$ switch.

path between an input and an output. For example, in the complete binary tree shown in Figure 6.8, the distance from input 1 to output 3 is six. No input and output are farther apart than this, so the diameter of this tree is also six.

More generally, the diameter of a complete binary tree with N inputs and outputs is $2 \log N + 2$. (All logarithms in this lecture—and in most of computer science—are base 2.) This is quite good, because the logarithm function grows very slowly. We could connect $2^{20} = 1,048,576$ inputs and outputs using a complete binary tree and the worst input-output delay for any packet would be this diameter, namely, $2 \log(2^{20}) + 2 = 42$.

6.3.4 Switch Size

One way to reduce the diameter of a network (and hence the latency needed to route packets) is to use larger switches. For example, in the complete binary tree, most of the switches have three incoming edges and three outgoing edges, which makes them 3×3 switches. If we had 4×4 switches, then we could construct a complete *ternary* tree with an even smaller diameter. In principle, we could even connect up all the inputs and outputs via a single monster $N \times N$ switch, as shown in Figure 6.9. In this case, the “network” would consist of a single switch and the latency would be 2.

This isn’t very productive, however, since we’ve just concealed the original network design problem inside this abstract monster switch. Eventually, we’ll have to design the internals of the monster switch using simpler components, and then we’re right back where we started. So the challenge in designing a communication network is figuring out how to get the functionality of an $N \times N$ switch using fixed size, elementary devices, like 3×3 switches.

6.3.5 Switch Count

Another goal in designing a communication network is to use as few switches as possible. The number of switches in a complete binary tree is $1 + 2 + 4 + 8 + \dots + N = 2N - 1$, since there is 1 switch at the top (the “root switch”), 2 below it, 4 below those, and so forth. This is nearly the best possible with 3×3 switches,

since at least one switch will be needed for each pair of inputs and outputs.

6.3.6 Congestion

The complete binary tree has a fatal drawback: the root switch is a bottleneck. At best, this switch must handle an enormous amount of traffic: every packet traveling from the left side of the network to the right or vice-versa. Passing all these packets through a single switch could take a long time. At worst, if this switch fails, the network is broken into two equal-sized pieces.

The traffic through the root depends on the routing problem. For example, if the routing problem is given by the identity permutation, $\pi(i) ::= i$, then there is an easy routing P that solves the problem: let P_i be the path from input i up through one switch and back down to output i . On the other hand, if the problem was given by $\pi(i) ::= (N - 1) - i$, then in *any* solution P for π , each path P_i beginning at input i must eventually loop all the way up through the root switch and then travel back down to output $(N - 1) - i$.

We can distinguish between a “good” set of paths and a “bad” set based on congestion. The *congestion* of a routing, P , is equal to the largest number of paths in P that pass through a single switch. Generally, lower congestion is better since packets can be delayed at an overloaded switch.

By extending the notion of congestion to networks, we can also distinguish between “good” and “bad” networks with respect to bottleneck problems. For each routing problem, π , for the network, we assume a routing is chosen that optimizes congestion, that is, that has the minimum congestion among all routings that solve π . Then the largest congestion that will ever be suffered by a switch will be the maximum congestion among these optimal routings. This “maxi-min” congestion is called the *congestion of the network*.

You may find it helpful to think about max congestion in terms of a value game. You design your spiffy, new communication network; this defines the game. Your opponent makes the first move in the game: she inspects your network and specifies a permutation routing problem that will strain your network. You move second: given her specification, you choose the precise paths that the packets should take through your network; you’re trying to avoid overloading any one switch. Then her next move is to pick a switch with as large as possible a number of packets passing through it; this number is her score in the competition. The max congestion of your network is the largest score she can ensure; in other words, it is precisely the max-value of this game.

For example, if your enemy were trying to defeat the complete binary tree, she would choose a permutation like $\pi(i) = (N - 1) - i$. Then for *every* packet i , you would be forced to select a path $P_{i,\pi(i)}$ passing through the root switch. Then, your

6.3. Communication Networks

network	diameter	switch size	# switches	congestion
complete binary tree	$2 \log N + 2$	3×3	$2N - 1$	N

Table 6.1 A summary of the attributes of the complete binary tree.

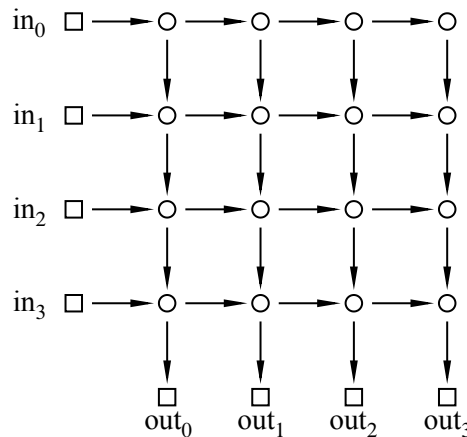


Figure 6.10 A 4×4 2-dimensional array.

enemy would choose the root switch and achieve a score of N . In other words, the max congestion of the complete binary tree is N —which is horrible!

We have summarized the results of our analysis of the complete binary tree in Table 6.1. Overall, the complete binary tree does well in every category except the last—congestion, and that is a killer in practice. Next, we will look at a network that solves the congestion problem, but at a very high cost.

6.3.7 The 2-d Array

An illustration of the $N \times N$ 2-d array (also known as the *grid* or *crossbar*) is shown in Figure 6.10 for the case when $N = 4$.

The diameter of the 4×4 2-d array is 8, which is the number of edges between input 0 and output 3. More generally, the diameter of a 2-d array with N inputs and outputs is $2N$, which is much worse than the diameter of the complete binary tree ($2 \log N + 2$). On the other hand, replacing a complete binary tree with a 2-d array almost eliminates congestion.

Theorem 6.3.1. *The congestion of an N -input 2-d array is 2.*

Proof. First, we show that the congestion is at most 2. Let π be any permutation. Define a solution, P , for π to be the set of paths, P_i , where P_i goes to the right

network	diameter	switch size	# switches	congestion
complete binary tree	$2 \log N + 2$	3×3	$2N - 1$	N
2-D array	$2N$	2×2	N^2	2

Table 6.2 Comparing the N -input 2-d array to the N -input complete binary tree.

from input i to column $\pi(i)$ and then goes down to output $\pi(i)$. In this solution, the switch in row i and column j encounters at most two packets: the packet originating at input i and the packet destined for output j .

Next, we show that the congestion is at least 2. This follows because in any routing problem, π , where $\pi(0) = 0$ and $\pi(N - 1) = N - 1$, two packets must pass through the lower left switch. ■

The characteristics of the 2-d array are recorded in Table 6.2. The crucial entry in this table is the number of switches, which is N^2 . This is a major defect of the 2-d array; a network with $N = 1000$ inputs would require a *million* 2×2 switches! Still, for applications where N is small, the simplicity and low congestion of the array make it an attractive choice.

6.3.8 The Butterfly

The Holy Grail of switching networks would combine the best properties of the complete binary tree (low diameter, few switches) and the array (low congestion). The *butterfly* is a widely-used compromise between the two. A butterfly network with $N = 8$ inputs is shown in Figure 6.11.

The structure of the butterfly is certainly more complicated than that of the complete binary or 2-d array. Let’s see how it is constructed.

All the terminals and switches in the network are in N rows. In particular, input i is at the left end of row i , and output i is at the right end of row i . Now let’s label the rows in *binary* so that the label on row i is the binary number $b_1 b_2 \dots b_{\log N}$ that represents the integer i .

Between the inputs and outputs, there are $\log(N) + 1$ levels of switches, numbered from 0 to $\log N$. Each level consists of a column of N switches, one per row. Thus, each switch in the network is uniquely identified by a sequence $(b_1, b_2, \dots, b_{\log N}, l)$, where $b_1 b_2 \dots b_{\log N}$ is the switch’s row in binary and l is the switch’s level.

All that remains is to describe how the switches are connected up. The basic

6.3. Communication Networks

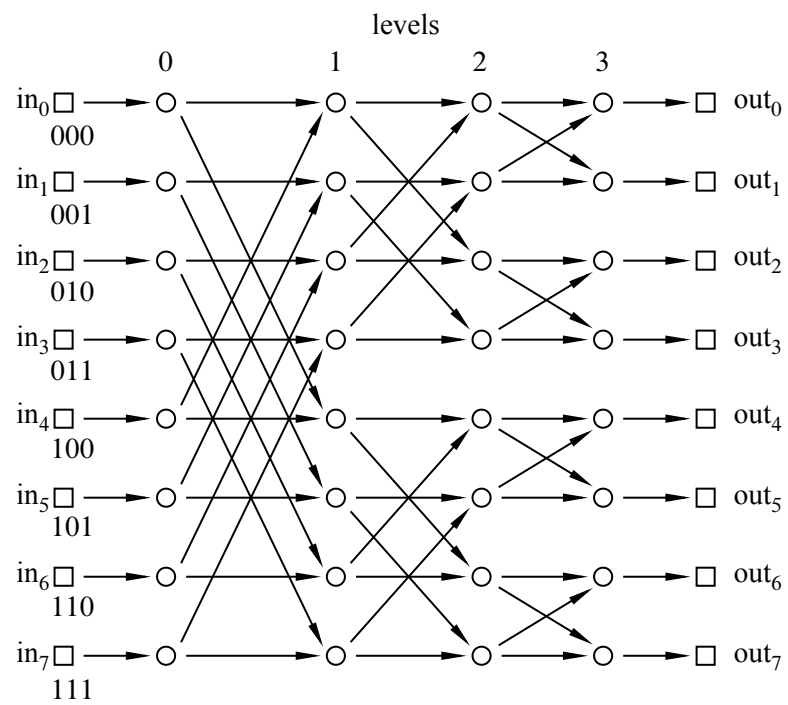


Figure 6.11 An 8-input/output butterfly.

Chapter 6 Directed Graphs

connection pattern is expressed below in a compact notation:

$$(b_1, b_2, \dots, b_{l+1}, \dots, b_{\log N}, l) \begin{array}{l} \nearrow (b_1, b_2, \dots, b_{l+1}, \dots, b_{\log N}, l + 1) \\ \searrow (b_1, b_2, \dots, \overline{b_{l+1}}, \dots, b_{\log N}, l + 1) \end{array}$$

This says that there are directed edges from switch $(b_1, b_2, \dots, b_{\log N}, l)$ to two switches in the next level. One edge leads to the switch in the *same* row, and the other edge leads to the switch in the row obtained by *inverting* the $(l + 1)$ st bit b_{l+1} . For example, referring back to the illustration of the size $N = 8$ butterfly, there is an edge from switch $(0, 0, 0, 0)$ to switch $(0, 0, 0, 1)$, which is in the same row, and to switch $(1, 0, 0, 1)$, which is in the row obtained by inverting bit $l + 1 = 1$.

The butterfly network has a recursive structure; specifically, a butterfly of size $2N$ consists of two butterflies of size N and one additional level of switches. Each switch in the additional level has directed edges to a corresponding switch in each of the smaller butterflies. For example, see Figure 6.12.

Despite the relatively complicated structure of the butterfly, there is a simple way to route packets through its switches. In particular, suppose that we want to send a packet from input $x_1 x_2 \dots x_{\log N}$ to output $y_1 y_2 \dots y_{\log N}$. (Here we are specifying the input and output numbers in binary.) Roughly, the plan is to “correct” the first bit on the first level, correct the second bit on the second level, and so forth. Thus, the sequence of switches visited by the packet is:

$$\begin{aligned} (x_1, x_2, x_3, \dots, x_{\log N}, 0) &\rightarrow (y_1, x_2, x_3, \dots, x_{\log N}, 1) \\ &\rightarrow (y_1, y_2, x_3, \dots, x_{\log N}, 2) \\ &\rightarrow (y_1, y_2, y_3, \dots, x_{\log N}, 3) \\ &\rightarrow \dots \\ &\rightarrow (y_1, y_2, y_3, \dots, y_{\log N}, \log N) \end{aligned}$$

In fact, this is the *only* path from the input to the output!

The congestion of the butterfly network is about \sqrt{N} . More precisely, the congestion is \sqrt{N} if N is an even power of 2 and $\sqrt{N/2}$ if N is an odd power of 2. The task of proving this fact has been left to the problem section.⁴

A comparison of the butterfly with the complete binary tree and the 2-d array is provided in Table 6.3. As you can see, the butterfly has lower congestion than the complete binary tree. And it uses fewer switches and has lower diameter than the

⁴The routing problems that result in \sqrt{N} congestion do arise in practice, but for most routing problems, the congestion is much lower (around $\log N$), which is one reason why the butterfly is useful in practice.

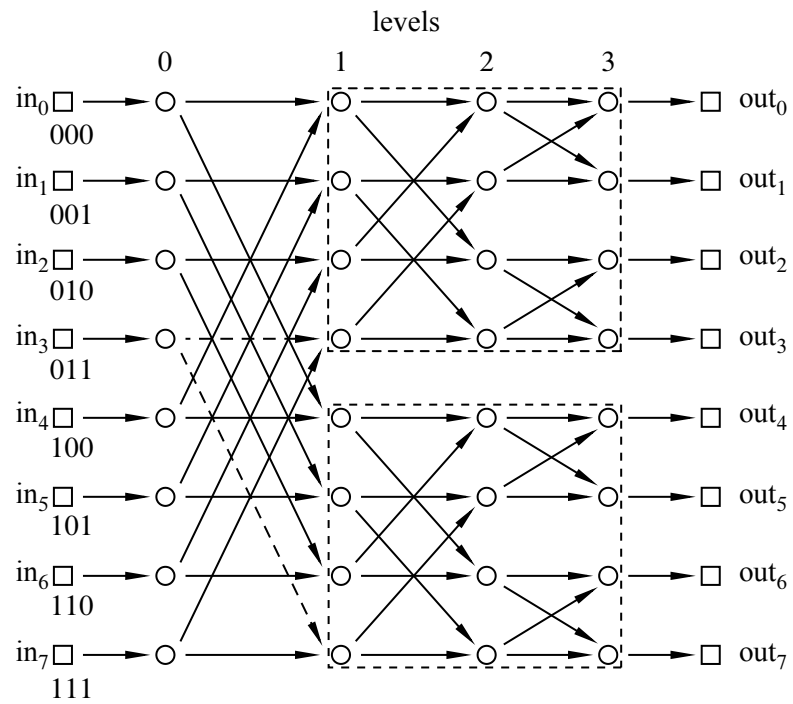


Figure 6.12 An N -input butterfly contains two $N/2$ -input butterflies (shown in the dashed boxes). Each switch on the first level is adjacent to a corresponding switch in each of the sub-butterflies. For example, we have used dashed lines to show these edges for the node (0, 1, 1, 0).

network	diameter	switch size	# switches	congestion
complete binary tree	$2 \log N + 2$	3×3	$2N - 1$	N
2-D array	$2N$	2×2	N^2	2
butterfly	$\log N + 2$	2×2	$N(\log(N) + 1)$	\sqrt{N} or $\sqrt{N/2}$

Table 6.3 A comparison of the N -input butterfly with the N -input complete binary tree and the N -input 2-d array.

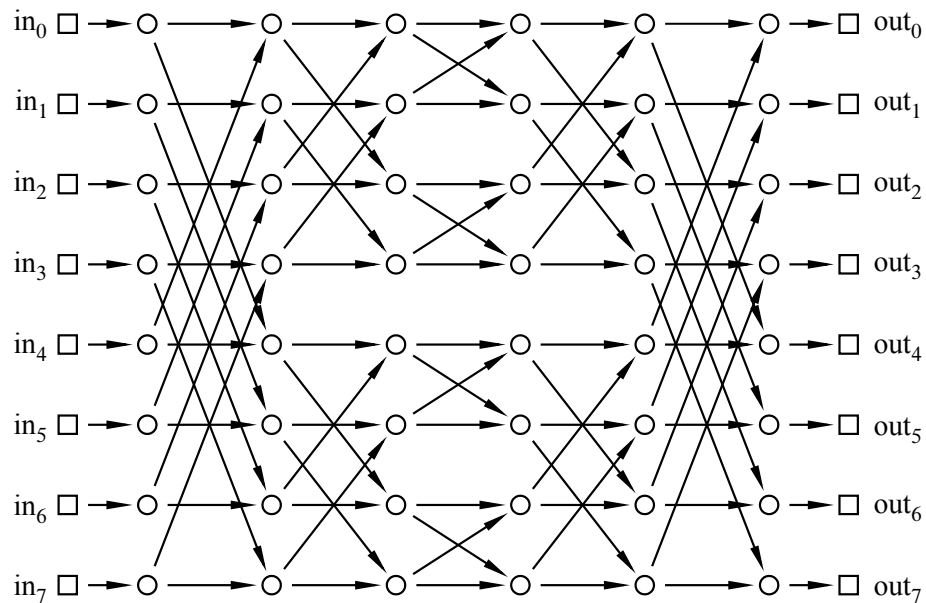


Figure 6.13 The 8-input Beneš network.

array. However, the butterfly does not capture the best qualities of each network, but rather is a compromise somewhere between the two. So our quest for the Holy Grail of routing networks goes on.

6.3.9 Beneš Network

In the 1960’s, a researcher at Bell Labs named Václav Beneš had a remarkable idea. He obtained a marvelous communication network with congestion 1 by placing *two* butterflies back-to-back. For example, the 8-input Beneš network is shown in Figure 6.13.

Putting two butterflies back-to-back roughly doubles the number of switches and the diameter of a single butterfly, but it completely eliminates congestion problems! The proof of this fact relies on a clever induction argument that we’ll come to in a

network	diameter	switch size	# switches	congestion
complete binary tree	$2 \log N + 2$	3×3	$2N - 1$	N
2-D array	$2N$	2×2	N^2	2
butterfly	$\log N + 2$	2×2	$N(\log(N) + 1)$	\sqrt{N} or $\sqrt{N/2}$
Beneš	$2 \log N + 1$	2×2	$2N \log N$	1

Table 6.4 A comparison of the N -input Beneš network with the N -input complete binary tree, 2-d array, and butterfly.

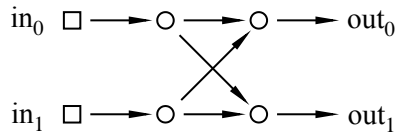


Figure 6.14 The 2-input Beneš network.

moment. Let’s first see how the Beneš network stacks up against the other networks we have been studying. As you can see in Table 6.4, the Beneš network has small size and diameter, and completely eliminates congestion. The Holy Grail of routing networks is in hand!

Theorem 6.3.2. *The congestion of the N -input Beneš network is 1 for any N that is a power of 2.*

Proof. We use induction. Let $P(a)$ be the proposition that the congestion of the 2^a -input Beneš network is 1.

Base case ($a = 1$): We must show that the congestion of the 2^1 -input Beneš network is 1. The network is shown in Figure 6.14.

There are only two possible permutation routing problems for a 2-input network. If $\pi(0) = 0$ and $\pi(1) = 1$, then we can route both packets along the straight edges. On the other hand, if $\pi(0) = 1$ and $\pi(1) = 0$, then we can route both packets along the diagonal edges. In both cases, a single packet passes through each switch.

Inductive step: We must show that $P(a)$ implies $P(a + 1)$ where $a \geq 1$. Thus, we assume that the congestion of a 2^a -input Beneš network is 1 in order to prove that the congestion of a 2^{a+1} -input Beneš network is also 1.

Digression

Time out! Let’s work through an example, develop some intuition, and then complete the proof. Notice that inside a Beneš network of size $2N$ lurk two Beneš subnetworks of size N . This follows from our earlier observation that a butterfly

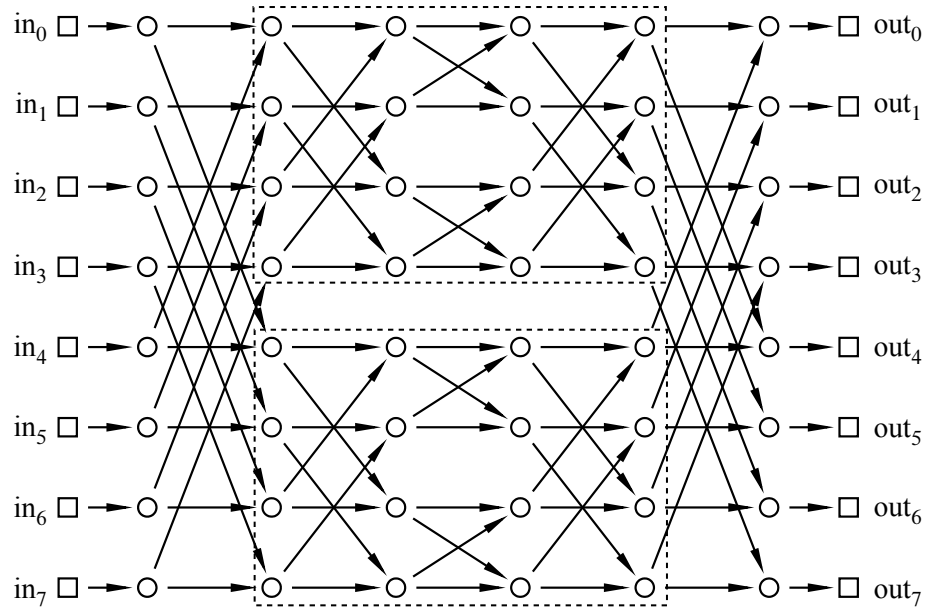


Figure 6.15 A $2N$ -input Beneš network contains two N -input Beneš networks—shown here for $N = 4$.

of size $2N$ contains two butterflies of size N . In the Beneš network shown in Figure 6.15 with $N = 8$ inputs and outputs, the two 4-input/output subnetworks are shown in dashed boxes.

By the inductive assumption, the subnetworks can each route an arbitrary permutation with congestion 1. So if we can guide packets safely through just the first and last levels, then we can rely on induction for the rest! Let’s see how this works in an example. Consider the following permutation routing problem:

$$\begin{array}{ll}
 \pi(0) = 1 & \pi(4) = 3 \\
 \pi(1) = 5 & \pi(5) = 6 \\
 \pi(2) = 4 & \pi(6) = 0 \\
 \pi(3) = 7 & \pi(7) = 2
 \end{array}$$

We can route each packet to its destination through either the upper subnetwork or the lower subnetwork. However, the choice for one packet may constrain the choice for another. For example, we can not route the packets at inputs 0 and 4 both through the same network since that would cause two packets to collide at a single switch, resulting in congestion. So one packet must go through the upper network and the other through the lower network. Similarly, the packets at inputs 1 and 5,

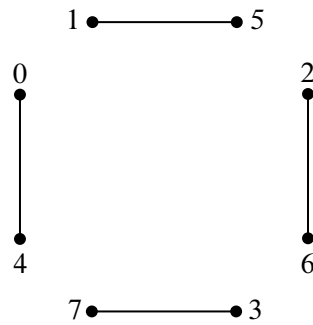


Figure 6.16 The beginnings of a constraint graph for our packet routing problem. Adjacent packets cannot be routed using the same sub-Beneš network.

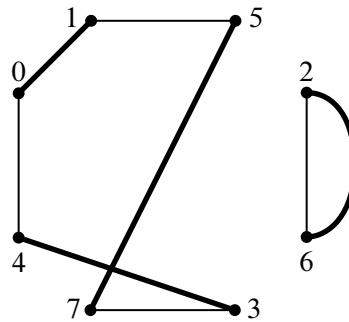


Figure 6.17 The updated constraint graph.

2 and 6, and 3 and 7 must be routed through different networks. Let’s record these constraints in a graph. The vertices are the 8 packets (labeled according to their input position). If two packets must pass through different networks, then there is an edge between them. The resulting constraint graph is illustrated in Figure 6.16. Notice that at most one edge is incident to each vertex.

The output side of the network imposes some further constraints. For example, the packet destined for output 0 (which is packet 6) and the packet destined for output 4 (which is packet 2) can not both pass through the same network since that would require both packets to arrive from the same switch. Similarly, the packets destined for outputs 1 and 5, 2 and 6, and 3 and 7 must also pass through different switches. We can record these additional constraints in our constraint graph with gray edges, as is illustrated in Figure 6.17.

Notice that at most one new edge is incident to each vertex. The two lines drawn between vertices 2 and 6 reflect the two different reasons why these packets must be routed through different networks. However, we intend this to be a simple graph;

the two lines still signify a single edge.

Now here’s the key insight: *a 2-coloring of the graph corresponds to a solution to the routing problem.* In particular, suppose that we could color each vertex either red or blue so that adjacent vertices are colored differently. Then all constraints are satisfied if we send the red packets through the upper network and the blue packets through the lower network.

The only remaining question is whether the constraint graph is 2-colorable. Fortunately, this is easy to verify:

Lemma 6.3.3. *If the edges of an undirected graph G can be grouped into two sets such that every vertex is incident to at most 1 edge from each set, then the graph is 2-colorable.*

Proof. Since the two sets of edges may overlap, let’s call an edge that is in both sets a *doubled edge*. Note that no other edge can be incident to either of the endpoints of a doubled edge, since that endpoint would then be incident to two edges from the same set. This means that doubled edges form connected components with 2 nodes. Such connected components are easily colored with 2 colors and so we can henceforth ignore them and focus on the remaining nodes and edges, which form a simple graph.

By Theorem 5.6.2, we know that if a simple graph has no odd cycles, then it is 2-colorable. So all we need to do is show that every cycle in G has even length. This is easy since any cycle in G must traverse successive edges that alternate from one set to the other. In particular, a closed walk must traverse a path of alternating edges that begins and ends with edges from different sets. This means that the cycle has to be of even length. ■

For example, a 2-coloring of the constraint graph in Figure 6.17 is shown in Figure 6.18. The solution to this graph-coloring problem provides a start on the packet routing problem. We can complete the routing in the two smaller Beneš networks by induction. With this insight in hand, the digression is over and we can now complete the proof of Theorem 6.3.2.

Proof of Theorem 6.3.2 (continued). Let π be an arbitrary permutation of $0, 1, \dots, N - 1$. Let G be the graph whose vertices are packet numbers $0, 1, \dots, N - 1$ and whose edges come from the union of these two sets:

$$E_1 ::= \{ \{u, v\} \mid |u - v| = N/2 \}, \text{ and}$$

$$E_2 ::= \{ \{u, w\} \mid |\pi(u) - \pi(w)| = N/2 \}.$$

Now any vertex, u , is incident to at most two edges: a unique edge $\{u, v\} \in E_1$ and a unique edge $\{u, w\} \in E_2$. So according to Lemma 6.3.3, there is a 2-coloring for

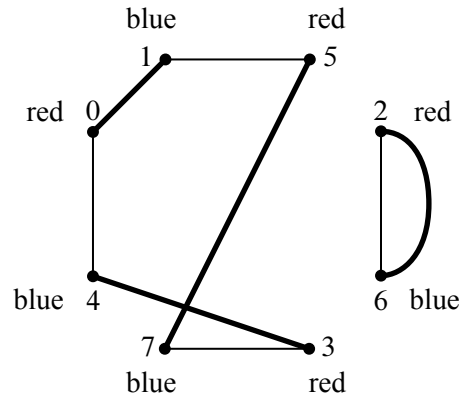


Figure 6.18 A 2-coloring of the constraint graph in Figure 6.17.

the vertices of G . Now route packets of one color through the upper subnetwork and packets of the other color through the lower subnetwork. Since for each edge in E_1 , one vertex goes to the upper subnetwork and the other to the lower subnetwork, there will not be any conflicts in the first level. Since for each edge in E_2 , one vertex comes from the upper subnetwork and the other from the lower subnetwork, there will not be any conflicts in the last level. We can complete the routing within each subnetwork by the induction hypothesis $P(n)$. ■



MIT OpenCourseWare
<http://ocw.mit.edu>

6.042J / 18.062J Mathematics for Computer Science
Fall 2010

For information about citing these materials or our Terms of Use, visit: <http://ocw.mit.edu/terms>.