

Application: Design a microfluidic device for a drug delivery experiment

This is a team assignment; every member of your team must take part in doing this assignment. Only one member of your team needs to submit this form.

Once you submit this form, please email a schematic diagram of your designed microfluidic device to realavi@mit.edu. The diagram can be hand-drawn or digital.

Imagine you are an applied researcher at a pharmaceutical company, working on the development of a new antibiotic drug (chemical) for treating an infectious disease caused by bacteria.

Initial testing of the chemical seems promising, and you are now at the stage of drug development where you need to determine the optimal amount of the chemical in terms of effectiveness and toxicity for the most common patient profile, in preparation for clinical trials. To do this, you will need to run a drug delivery experiment by monitoring cultured (living and growing) cells as they are exposed to varying gradients of the chemical in varying durations.

To achieve this benefit, you will need to design a microfluidic device (a system) with the following function:

Input: two concentrations: 0% (buffer) and 100% (all chemical), from one or more input systems. In this particular case, an input system is a syringe. You may use unlimited amounts of either concentration.

Output: for the first 30 minutes, produce a chemical concentration gradient in the device which ranges from 0% to 50%; for the next 30 minutes, wash the device out with buffer solution; and for the final 30 minutes, produce a chemical concentration gradient from 50% to 100%.

Select the simplest and most efficient design required to achieve the intended function of the system. You can use any number of parts, of any type.

You can use the [Preparation article on systems thinking](#) as a source for the systems thinking framework (SAFO).

Parts and their behaviors

Inlet: transports the solution toward a channel or a mixer.

Outlet: transports the solution toward the waste/reservoirs or for recollection of fluid for chemical analysis.



Channel: transports the solution inside the device. The channel is where the experiment itself happens, and is the part that is observed and recorded. For purposes of this assignment, we assume that the input concentrations reach a linear gradient in the channel and do not mix completely.

Mixer: generates a new concentration of chemical in the solution from multiple inputs of different concentrations. A mixer can be connected to inlet/s and/or channel/s. The concentration at the exit point of the mixer is an average of the input concentrations. For example, two inputs with low and high concentration, respectively, will result in a medium concentration at the exit point of the mixer.

Valve: blocks or releases the flow of the solution through different parts of a microfluidic device, usually inlet/s or outlet/s. For purposes of this assignment, assume you can control the valves as you like.

Membrane: Used to filter molecules within the solution by size.



* Indicates required question

Email *

Your email


Select your team's letter. *

- C
- A
- D
- B



Microfluidic chip fabricated in glass.

This chip contains two inlets, multiple channels (or one long, winding channel), and one outlet. Each channel is 50 μ m deep and 150 μ m wide.



© Dr. Sven Tombrink, Process Engineer ix-factory GmbH. License CC BY-SA. Some rights reserved. This content is excluded from our Creative Commons license. For more information, see <https://ocw.mit.edu/help/faq-fair-use/>



System Architecture-Function-Outcome (SAFO) framework



System*
Technological
Engineered



Architecture
Structure +
Behavior



Function
The system of interest's
interactions with boundary
systems**:
Input systems and inputs
Output systems and outputs

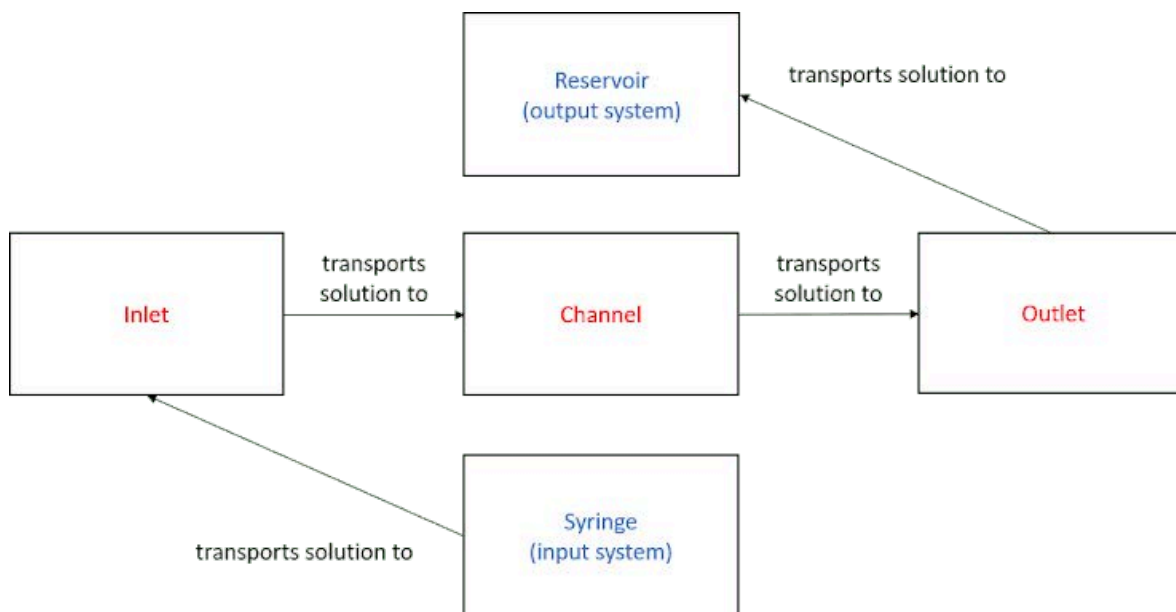


Outcome:
Problem
Stakeholders
Benefits
Detriments

* System of interest

** Boundary systems do not have to be technological.

Schematic of the system architecture and function of a basic microfluidic device, containing one inlet, one channel, and one outlet.



Select parts (system structure) for achieving the intended function of the system *
of interest (the microfluidic device).

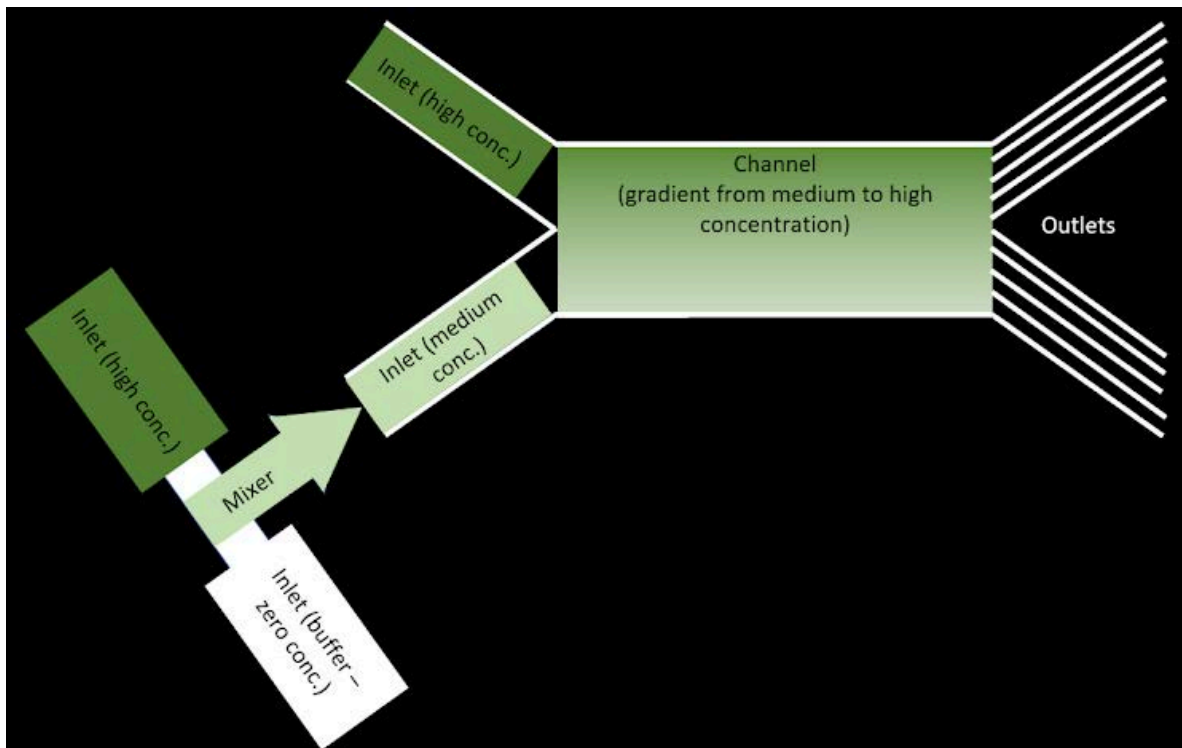
- Outlet/s
- Valve/s
- Channel/s
- Mixer/s
- Inlet/s
- Membrane/s

For each part you selected, explain your choice. In your explanation, refer to the *
intended behavior of each part and to the intended function of the system of
interest (the microfluidic device).

Your answer



Compare the benefits for drug delivery experiments to you, the researcher, of the newly designed device versus the design of the instructors' solution for Application3. *



Your answer

Submit

Clear form

Never submit passwords through Google Forms.

This form was created outside of your domain. [Report Abuse](#) - [Terms of Service](#) - [Privacy Policy](#)

Google Forms



MIT OpenCourseWare
<https://ocw.mit.edu/>

SP.248 NEET Ways of Thinking
Fall 2023

For information about citing these materials or our Terms of Use, visit: <https://ocw.mit.edu/terms>.